


International Foundation Mathematics Olympiad (IFMO)

CLASS 1

WORKSHEET – 2

SECTION-A (Logical Reasoning)

1. Observe the following figures carefully.



If Summi's position is interchanged by Somya's position, then which girl will be positioned at 6th position?

- A. Somya B. Summi C. Somi D. Sonu

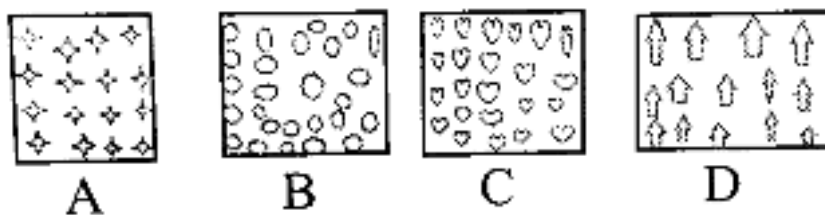
Directions: Observe the given figure carefully and answer the following questions.



2. If Suhani took the immediate left umbrella of the umbrella K, which umbrella did she take?

- A. M B. N C. F D. H


3. Identify the group in which components can be divided into groups of four equally and completely.



4. Which of the following figures is hidden or embedded in the given figure?



Directions: Observe the given figures carefully and answer the following questions. Left / First



5. W brick is at the 5th position from the left. Now find out the name and position (from the left) of the brick which is at the immediate left of the W brick.

- A. V, fifth B. R, fifth C. V, fourth D. R, fourth

Directions: Observe the given figure carefully and answer the following questions. Left (First)



6. Bird O is second to the right of bird _____

- A. P B. I C. M D. N

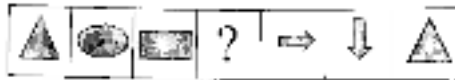
7. Find the odd one out.



8. Find the odd one out.



9. Complete the pattern by choosing the next figure.



10. Which one of the following is the first month of the year?

A. July


B. November

C. January

D. December

SECTION-B (Day to Day Mathematics)

11. Which of the following is 1 more than 4?



12. Choose the one that is wrong.

- A. Four - 4
- B. Seven - 7
- C. Nine - 9
- D. One - 0

13. Which number is between 14 and 16?

- A. 23
- B. 13
- C. 15
- D. 17

14. Look at the given figure.



$$3 + 5 = ?$$

Find the number which comes in place of ?

- A. 9
- B. 8
- C. 10
- D. 7


15. There are 10 boys and 15 girls in a class. How many children are there in the class?

- A. 31
- B. 25
- C. 41
- D. 42

16. Roohi eats 5 biscuits, from a packet of 10 biscuits. How many are left ?

- A. 4
- B. 6
- C. 10
- D. 5

17. Which kite has the shortest tail?



18. When do you wake up?

- A. Afternoon
- B. Night
- C. Morning
- D. Evening

19. If yesterday was Thursday, then today is _____

- A. Friday
- B. Wednesday
- C. Saturday
- D. Sunday

20. Rs 3 = _____

- A. Six 25 paisa coin
- B. Five 50 paisa coin
- C. Six 50 paisa coin
- D. Ten 10 paisa coin

21. How many Kittens would be there in each basket if – the same number of Kittens are put into each basket?



- A. 8
- B. 6
- C. 5
- D. 12

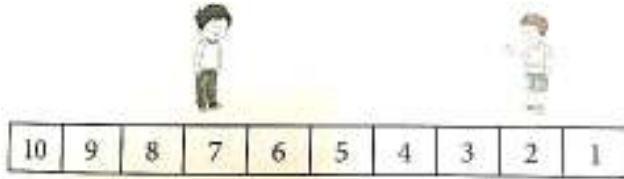
22. Which of the following make Rs. 10?

- A. Two Rs 2 Coins
- B. Four Rs 2 Coins
- C. Five Rs 2 Coins
- D. Five Rs 1 Coins

23. Which is the smallest number?

- A. 3 Tens 3 Ones
- B. 2 Tens
- C. 3 Tens
- D. 2 Tens 5 Ones

24. Ram and Shyam are playing a game. Shyam asked Ram to move 2 steps away from him. If Ram is on 7th step, where will he be now?



A. 3rd step

B. 9th step

C. 5th step

D. 10th step

25. Given pot has 1 grey ball and rest blue balls. How many blue balls are there in the pot?



A. 11

B. 13

C. 12

D. 14

ANSWER IFMO CLASS 1 – WORKSHEET – 2

1	A	2	A	3	A	4	B	5	C	6	B	7	D	8	D	9	B	10	C
11	A	12	D	13	C	14	B	15	B	16	D	17	A	18	C	19	A	20	C
21	B	22	C	23	A	24	B	25	B										