

International Foundation Science Olympiad (IFSO)

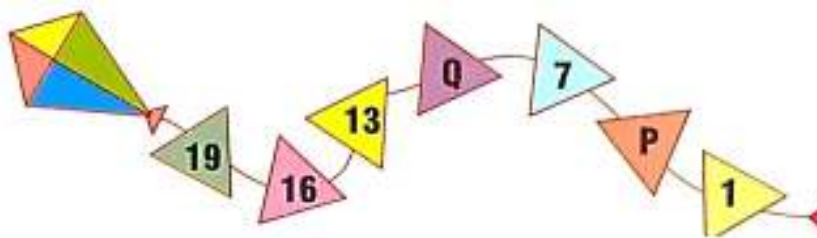
CLASS 2

WORKSHEET – 3

s

SECTION-A (Logical Reasoning)

1. Find the value of P and Q in the number pattern.



- A. 2, 8 B. 3, 10 C. 3, 8 D. 4, 10

2. Identify the correct amount of money shown below.



- A. 15 B. ` 11 C. ` 13 D. ` 17

3. Anuj takes bath in the _____ to go to school.

- A. Afternoon
B. Night
C. Morning
D. Midnight



4. There are _____ groups of 3 dogs.



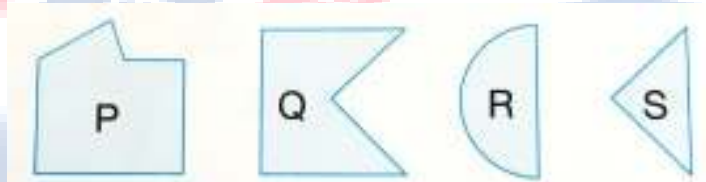
- A. 5 B. 1 C. 2 D. 3

5. Count the number of triangles in the figure.



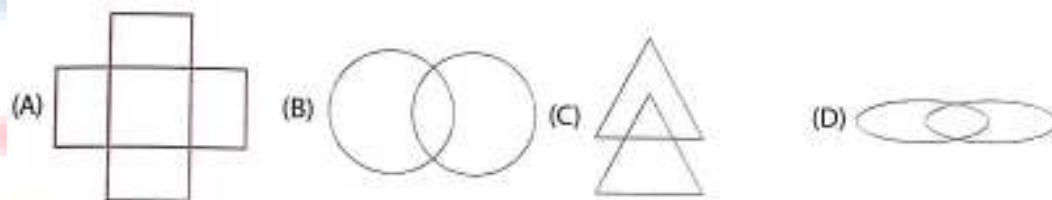
- A. 10 B. 11 C. 12 D. 13

6. Shapes _____ and _____ will combine to form a square.

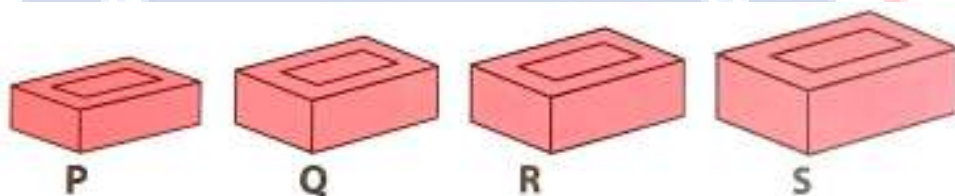


- A. P, R B. Q, S C. S, P D. Q, R

7. Find the odd one out.



Direction (8-9): Study the given picture and answer the following questions.



8. Which of the brick is thickest?

- A. Q B. P C. R D. S

9. Which of the brick is thinnest?


A. P

B. S

C. Q

D. R

10. There are _____ groups of 2 ants.



A. 2

B. 1

C. 4

D. 3

SECTION-B (Day to Day Science)

11. Which one of the following is a non living thing?

(A) Sparrow



(B) Squirrel



(C) Stone



(D) None of these

12. Which one of the following is called the king of fruits?

(A) Mango



(B) Apple



(C) Papaya



(D) None of these

13. Pramod eats cashew nut. What is it called?

A. Fruit

B. Dry fruit

C. Sweet fruit

D. None of these

14. What will you call fallen leaves?

A. Living thing

B. Non living thing

C. Both living and non living thing


D. None of these

15. Always watch the TV at

- A. Very high volume
- C. Low volume

- B. High volume
- D. None of these

16. Identify the healthy food




17. What protects us from rain?

- A. Clothes
- C. Umbrella

- B. Jacket
- D. None of these

18. Which one of the following you can eat without cooking?



19. Plants do not need _____ to grow.

- A. Plastic
- C. Air

- B. Water
- D. None of these

20. Rohan always bathe under the shower. What will you call it?

- A. Saving of water
- C. Both A and B

- B. Wastage of water
- D. None of these

21. Consider the following two statements:

Statement 1: Carpenter makes shoes.

Statement 2: Dentist works in the post office.

Which of the following is correct with respect to the above statement?

- A. Statement 1 is correct
- B. Statement 2 is correct
- C. Statement 1 and 2 are correct
- D. Neither statement 1 nor statement 2 is correct

22. Match the following:

1. Eye




2. Lips



3. Palm



4. Teeth



A. 1-C, 2-A, 3-D, 4-B

B. 1-C, 2-D, 3-B, 4-A

C. 1-D, 2-C, 3-B, 4-A

D. 1-C, 2-A, 3-B, 4-D

23. All kinds of plant, whether they grow on land or in water requires:

A. Food

B. Water

C. Air

D. All of these

24. We would die within minutes in the absence of:

A. Food

B. Water

C. Air

D. All of these

25. Which one of the following is the biggest water source?

A. River

B. Lakes

C. Ponds

D. Oceans

ANSWER IFSO CLASS 2 – WORKSHEET – 3

1	D	2	D	3	C	4	D	5	A	6	B	7	A	8	D	9	A	10	C
11	C	12	A	13	B	14	B	15	C	16	D	17	C	18	C	19	B	20	B
21	D	22	C	23	D	24	C	25	D										

