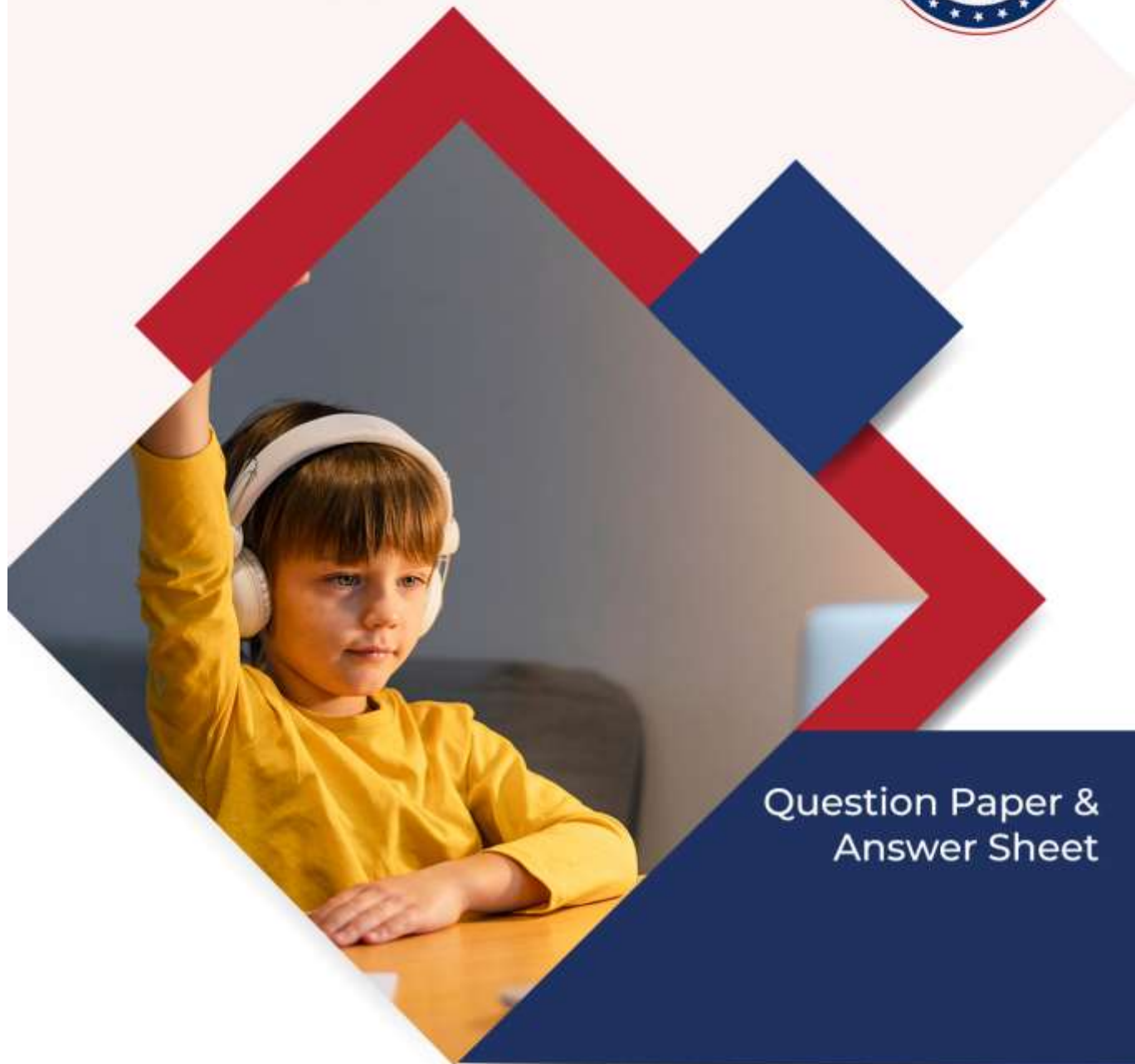


International Olympiad Foundation (IOF)  
(IOLYMPIADS LLP)

Certifying Talents Across World



Question Paper &  
Answer Sheet

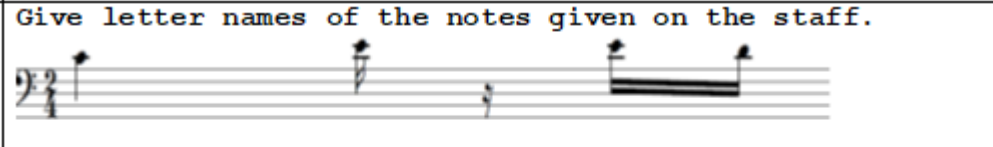
**IFWMuO**  
International Foundation  
Western Music Olympiad

# International Foundation Western Music Olympiad (IFWMO)- 2021

## SECTION-A (Pitch and Scales)

1. Answer the following Question


Give letter names of the notes given on the staff.





A B - E - D - D  
B C - E - E - D  
C B - D - E - F  
D C - D - D - C


2. Answer the following Question


Which notes are on the same pitch



A 

B 

C 

D 

3. Answer the following Question

Which notes have been transposed up by an octave



4. Answer the following Question

Identify the Scale



A C Major Descending

B A Minor Descending

C A Minor Ascending

D A Major Descending

5. Answer the following Question

Identify the scale



A Diatonic


B Chromatic Ascending

C Chromatic Descending

D Pentatonic Descending

6. Answer the following Question

This Key Signature Stands for



- |   |                |
|---|----------------|
| A | G Major Scale  |
| B | F Minor Scale  |
| C | A Major Scale  |
| D | G# Major Scale |

7. Answer the following Question

Relative Major of D minor scale is

- |   |                 |
|---|-----------------|
| A | F major         |
| B | E Major         |
| C | G major         |
| D | <u>Eb</u> Major |

8. Answer the following Question

Seventh Degree of a scale is also called as

- |   |              |
|---|--------------|
| A | Super Tonic  |
| B | Sub Medent   |
| C | Sub Dominant |
| D | Leading Note |

9. Answer the following Question


Identify this Hand Action



- |   |    |
|---|----|
| A | Fa |
| B | Mi |
| C | Re |
| D | La |

10. Answer the following Question


Name the Interval as per the Key signature



- |   |                |
|---|----------------|
| A | Major Second   |
| B | Perfect Unison |
| C | Perfect Fifth  |
| D | Major Seventh  |

11. Answer the following Question

Name the Clef will be placed here if it is a Bb major  
Tried.



- |   |                 |
|---|-----------------|
| A | Treble Clef     |
| B | Bass Clef       |
| C | Alto Clef       |
| D | Percussion Clef |

12. Answer the following Question

Identify this music



- |   |                  |
|---|------------------|
| A | Broken Chord     |
| B | Arpeggio         |
| C | Major Scale      |
| D | Pentatonic Scale |

13. Answer the following Question

This music is in



- |   |                   |
|---|-------------------|
| A | Contrary Motion   |
| B | Descending Motion |
| C | Similar Motion    |
| D | Static            |


14. Answer the following Question

Which Roman Numeral fits here




- |   |                 |
|---|-----------------|
| A | I - V - IV - VI |
| B | I - V - IV - vi |
| C | V - VI - ii - I |
| D | I - IV - II - V |

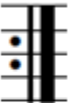
15. Answer the following Question

|   |                       |
|---|-----------------------|
| Identify the dynamics   |                       |
|  |                       |
| <i>ff</i>   |                       |
| A   | Medium Loud           |
| B   | Loud                  |
| C   | Very Loud             |
| D   | Very <u>Very</u> Loud |


16. Answer the following Question

|   |              |
|---|--------------|
| Name the interval   |              |
|  |              |
| A   | Minor Third  |
| B   | Major Second |
| C   | Major Third  |
| D   | Unison       |


17. Answer the following Question

|   |                       |
|---|-----------------------|
| This Symbol Stands for  |                       |
|  |                       |
| A   | End of Music          |
| B   | Starting of Music     |
| C   | Don't play after this |
| D   | Repeat from the start |


18. Answer the following Question

|   |          |
|---|----------|
| The Curve joining the two notes is  |          |
|  |          |
| A   | A Slur   |
| B   | A Tie    |
| C   | A Phrase |
| D   | A Curve  |

19. Answer the following Question






|   |   |
|---|---|
| Name the pitch of the note  |   |
|  |   |
| A   | E |
| B   | C |
| C   | G |
| D   | D |

20. Answer the following Question

|   |          |
|---|----------|
| Name the scale  |          |
|  |          |
| A   | Bb Major |
| B   | F major  |
| C   | Eb major |
| D   | Cb Major |


## SECTION-B (Rythm)





21. Answer the following Question

|   |   |
|---|---|
| Add Correct time Signature  |   |
|  |   |
| A   |  |
| B   |  |
| C   |  |
| D   |  |

22. Answer the following Question


Choose the right rest/rests



|   |   |
|---|---|
| A |  |
| B |  |
| C |  |
| D |  |

23. Answer the following Question


The Longest tied note is in \_\_\_\_\_ bar.



|   |                     |
|---|---------------------|
| A | 1 <sup>st</sup> Bar |
| B | 2 <sup>nd</sup> bar |
| C | Zero bar            |
| D | 3 <sup>rd</sup> Bar |

24. Answer the following Question


Count and tell the total no of crotchet notes




|   |   |
|---|---|
| A | 6 |
| B | 8 |
| C | 9 |
| D | 5 |

25. Answer the following Question

Choose the Correct Note Value take time




signature as




|   |            |
|---|------------|
| A | Minim      |
| B | Crotchet   |
| C | Semi Breve |
| D | Quaver     |




26. Answer the following Question

|   |   |
|---|---|
| How Many Crotchet notes are written in the given music                            |   |
|  |   |
| A   | 6 |
| B   | 7 |
| C   | 8 |
| D   | 5 |

27. Answer the following Question

|   |                |
|---|----------------|
| This Melody is in _____ time  |                |
|  |                |
| A   | Compound Duple |
| B   | Simple Duple   |
| C   | Quadruple      |
| D   | Triple         |


28. Answer the following Question

|  |                                |
|--|--------------------------------|
| Triplet means  |                                |
|  |                                |
| A  | Duplet                         |
| B  | Three notes played in 3 counts |
| C  | Three Notes in the time of two |
| D  | Tied notes                     |

29. Answer the following Question

|               |                  |
|---------------|------------------|
| Andante Means |                  |
| A             | Fast             |
| B             | Slow and steady  |
| C             | Moderately Quick |
| D             | Walking Pace     |


30. Answer the following Question

|   |          |
|---|----------|
| This Symbol means   |          |
|  |          |
| A   | Accent   |
| B   | Tenuto   |
| C   | Staccato |
| D   | Legato   |


31. Answer the following Question

|            |                            |
|------------|----------------------------|
| This means |                            |
| ♩ = 90     |                            |
| A          | 90 Crotchet per minute     |
| B          | 90 crotchets in full score |
| C          | 90 times play the music    |
| D          | Crotchets at 90 seconds    |


32. Answer the following Question

|   |             |
|---|-------------|
| This pattern is known as  |             |
|  |             |
| A   | Sequence    |
| B   | Cannon      |
| C   | Syncopation |
| D   | Ostinato    |


33. Answer the following Question

|   |                  |
|---|------------------|
| How should this given music be played   |                  |
| ♩ = 120   |                  |
|  |                  |
| A   | Slow             |
| B   | Quick            |
| C   | Fairly Quick     |
| D   | At a medium pace |

34. Answer the following Question

|   |                      |
|---|----------------------|
| This is a _____ rest  |                      |
|  |                      |
| A   | Quaver Rest          |
| B   | Crotchet Rest        |
| C   | Dotted Quaver Rest   |
| D   | Dotted Crotchet Rest |

35. Answer the following Question

|   |                        |
|---|------------------------|
| Name the Shortest rest  |                        |
|  |                        |
| A   | Dotted Semiquaver Rest |
| B   | Demisemiquaver Rest    |
| C   | Crotchet Rest          |
| D   | Minim Rest             |

## SECTION-C (Instruments and Voice)

36. Answer the following Question

|  |               |
|--|---------------|
| The Basic Bass Guitar Strings are tuned as |               |
| A  | E - B- G - D  |
| B  | G - D - A - E |
| C  | B - G - D - A |
| D  | G - D - A - E |

37. Answer the following Question

|                       |          |
|-----------------------|----------|
| Highest Male Voice is |          |
| A                     | Baritone |
| B                     | Bass     |
| C                     | Tenor    |
| D                     | Soprano  |

38. Answer the following Question

|  |             |
|--|-------------|
| When Four Singers Sing/Play the performance is called as |             |
| A  | Quartet     |
| B  | Group       |
| C  | Choir       |
| D  | Four in one |

39. Answer the following Question

|                                 |            |
|---------------------------------|------------|
| Bassoon Belongs to _____ Family |            |
| A                               | Brass      |
| B                               | Percussion |
| C                               | Strings    |
| D                               | Woodwind   |

40. Answer the following Question

|  |         |
|--|---------|
| One out of the following is not an Orchestral instrument |         |
| A  | Piano   |
| B  | Horn    |
| C  | Piccolo |
| D  | Trumpet |

41. Answer the following Question

|                       |        |
|-----------------------|--------|
| Viola Uses _____ clef |        |
| A                     | Alto   |
| B                     | Treble |
| C                     | Bass   |
| D                     | Tenor  |

42. Answer the following Question

|                                    |            |
|------------------------------------|------------|
| Clarinet is a part of _____ family |            |
| A                                  | Brass      |
| B                                  | Woodwind   |
| C                                  | Strings    |
| D                                  | Percussion |

43. Answer the following Question

|   |                           |
|---|---------------------------|
| A Single Instrumental Performance is known as |                           |
| A   | A Solo Performance        |
| B   | An Individual             |
| C   | Great Singing performance |
| D   | A Duet Performance        |

44. Answer the following Question

|                |                                   |
|----------------|-----------------------------------|
| S.S.A.A. means |                                   |
| A              | Soprano - Solo - Alto - Alternate |
| B              | Solo - Single - Adagio - Allegro  |
| C              | Soprano - Soprano - Alto - Alto   |
| D              | Soprano - Soprano - Alter - Alto  |

45. Answer the following Question

|                      |           |
|----------------------|-----------|
| Lowest Male Voice is |           |
| A                    | Baritone  |
| B                    | Bass      |
| C                    | Alto      |
| D                    | Contralto |


46. Answer the following Question

|                                     |       |
|-------------------------------------|-------|
| There are _____ strings in a guitar |       |
| A                                   | Six   |
| B                                   | Seven |
| C                                   | Eight |
| D                                   | Four  |

47. Answer the following Question

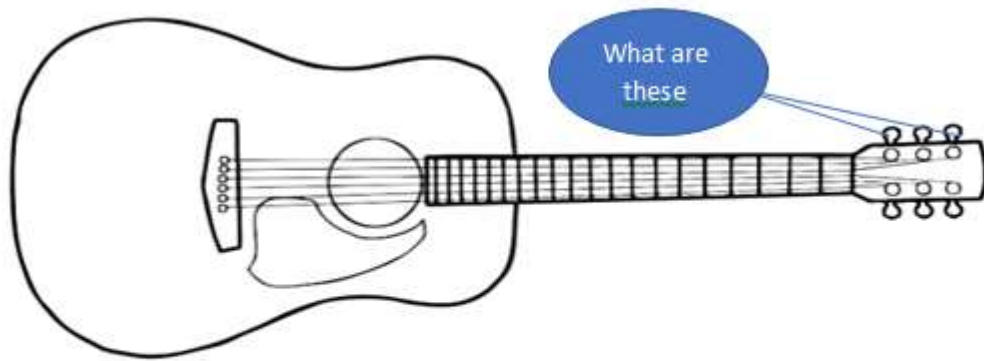
|                       |                 |
|-----------------------|-----------------|
| Bass Clef is used for |                 |
| A                     | Alto            |
| B                     | Soprano         |
| C                     | Bass            |
| D                     | Mezzo - Soprano |

48. Answer the following Question



|   |            |
|---|------------|
| A | Snare Drum |
| B | Side Drum  |
| C | Right Tom  |
| D | Left Tom   |

49. Answer the following Question



|   |   |
|---|---|
| A | Keys                                      |
| B | Nobs                                      |
| C | String holders                            |
| D | Machine Heads / Tuning Keys / Tuning Pegs |

50. Answer the following Question

|   |           |
|---|-----------|
| A Glide from one pitch to Another on Keyboard / Guitar string is known as |           |
| A   | Flamingo  |
| B   | Glissando |
| C   | Staccato  |
| D   | legato    |



# International Olympiad Foundation

Certifying Talents Across World

## IFWMO

International Foundation  
Western Music Olympiad

### ANSWER SHEET

| Question No. | Answer | Question No. | Answer |
|--------------|--------|--------------|--------|
| 1.           | B      | 26.          | B      |
| 2.           | A      | 27.          | A      |
| 3.           | C      | 28.          | C      |
| 4.           | D      | 29.          | D      |
| 5.           | B      | 30.          | B      |
| 6.           | C      | 31.          | A      |
| 7.           | A      | 32.          | A      |
| 8.           | D      | 33.          | C      |
| 9.           | A      | 34.          | C      |
| 10.          | B      | 35.          | B      |
| 11.          | A      | 36.          | B      |
| 12.          | B      | 37.          | C      |
| 13.          | C      | 38.          | A      |
| 14.          | A      | 39.          | D      |
| 15.          | C      | 40.          | A      |
| 16.          | C      | 41.          | A      |
| 17.          | D      | 42.          | B      |
| 18.          | B      | 43.          | A      |
| 19.          | B      | 44.          | C      |
| 20.          | A      | 45.          | B      |
| 21.          | B      | 46.          | A      |
| 22.          | D      | 47.          | C      |
| 23.          | A      | 48.          | A      |
| 24.          | C      | 49.          | D      |
| 25.          | B      | 50.          | B      |