



**INTERNATIONAL
OLYMPIAD FOUNDATION
(IOF)**



2022

QUESTION PAPER

Class-1 to 12

**International Foundation
Western Music Olympiad
(IFWMuO)**

For more visit www.iof.education

+91 9810466668

Total Time : 60 Minutes

Total Questions : 50

Total Marks : 50

Instructions : **PLEASE READ CAREFULLY BEFORE ENTERING IN TEST SCREEN:**

1. **International Olympiad Foundation, one of the world's premier academic and research institutions, welcomes you to the Online Olympiad Platform and wishes you ALL THE BEST.**
2. **Make sure that pop-up blocker is disabled on your browser before logging in for the examination.**
3. **During the examination, do not switch from the test page to any other page.**
4. **Once logged-in through one browser tab, user cannot login from any other browser/same browser tab.**
5. **In case of power failure, you can resume the examination from where you left by logging in again.**
6. **In case of internet failure, wait till your internet resumes and resume the examination.**
7. **If internet speed is unreasonably slow, images and tables in the questions may take little longer to appear.**
8. **This is a Multiple-Choice Question (MCQ) type examination. You can go back to the previous questions.**
9. **Once an examination is attempted, you can not appear for it again.**
Examination window will be activated on the declared time and date only.
10. **You should manage your time wisely and not spend too much or too little of it on any one question. A timer is present on the console which will help you keep track of time during the course of the examination.**
11. **Check your work before you submit it. Ensure that every answer is complete and appears as you intended. Try to attempt all the questions as no Negative marking is applied in this examination.**
12. **The examination is one-hour long. You cannot pause the timer or test in between. Answers will be submitted automatically after one hour after student begins.**
13. **Registration itself will not fetch a participation certificate. Students who will appear for exam and attempt the paper will be eligible for a certificate.**
14. **After successful online paper submission, you will be notified about the result on your email ID/SMS by last week of January 2023.**
15. **IOF evaluation process is totally computer oriented and generated. No request for revaluation will be entertained. No questions and queries regarding the result is subject to addressal.**
16. **The student will be disqualified if he / she use any unfair means, or receive unfair assistance from parent or any other source.**
17. **No secondary devices in the room or test area are allowed.**
18. **Decision of International Olympiad Foundation is final in all matters.**

Q1. Answer the following Question.

[+1]

[-0]

Name the note on the given staff



| | | | |
|-------|-------|-------|-------|
| A - A | B - B | C - F | D - G |
|-------|-------|-------|-------|

- A. A
- B. B
- C. C
- D. D
- E. None of these is correct

Q2. Answer the following Question.

[+1]

[-0]

Which is the lowest note in the given music



| | | | |
|-------|--------|-------|--------|
| A - A | B - F# | C - F | D - A# |
|-------|--------|-------|--------|

- A. A
- B. B
- C. C
- D. D
- E. None of these is correct

Q3. Which staff has the notes one octave above the 1st staff.

[+1]

[+1]



- A. No 2
- B. No 3
- C. No 4
- D. No 1
- E. None of these is correct

Q4. Answer the following Question.

[+1]
[-0]

| | | | |
|--------------------------|------------------|---------------------|------------|
| Identify the scale | | | |
| | | | |
| A. B Natural Minor Scale | B. D Major Scale | C. B Harmonic Minor | D. D Minor |

- A. A
- B. B
- C. C
- D. D
- E. None of these is correct

Q5. Answer the following Question

[+1]
[-0]

| | | | |
|----------------------|---------------------|---------------------|----------------------|
| Which scale is this? | | | |
| | | | |
| A. E Major | B. C# Natural Minor | C. C# Melodic Minor | D. C# Harmonic Minor |

- A. A
- B. B
- C. C
- D. D
- E. None of these is correct

Q6. Answer the following Question.

[+1]
[-0]

| | | | |
|---|---|---|---------------------------|
| Which Degrees of the scale would you raise to make it an E melodic minor <u>scale</u> | | | |
| | | | |
| A. 4 th and 5 th degree | B. 6 th and 7 th degree | C. 7 th and 8 th degree | D. 7 th degree |

- A. A
- B. B
- C. C
- D. D
- E. None of these is correct

Q7. Answer the following Question.

[+1]
[-0]

| | | | |
|-------------------------------------|------------|-------------|------------|
| Name the relative minor of Ab Major | | | |
| | | | |
| A. F Minor | B. G Minor | C. F# Minor | D. E Minor |

- A. A
- B. B
- C. C
- D. D
- E. None of these is correct

Q8. Answer the following Question.


[+1]
[-0]

| | | | |
|--|--------------------|--------------------|--------------------|
| Mediant is the _____ Degree of a scale | | | |
| A. 6 th | B. 7 th | C. 2 nd | D. 3 rd |

- A. A
- B. B
- C. C
- D. D
- E. None of these is correct

Q9. Answer the following Question.


[+1]
[-0]

| | | | |
|---|-------|-------|-------|
| This Hand direction represents which pitch. | | | |
|  | | | |
| A. La | B. So | C. Fa | D. Mi |

- A. A
- B. B
- C. C
- D. D
- E. None of these is correct

Q10.


[+1]
[-0]

| | | | |
|---|--------------------------|--------------------------|--------------------------|
| Name the Interval | | | |
|  | | | |
| A. Major 3 rd | B. Minor 3 rd | C. Major 2 nd | D. Minor 2 nd |

- A. A
- B. B
- C. C
- D. D
- E. None of these is correct

Q11. Answer the following Question.

[+1]
[-0]

| | | | |
|---|--------------------|----------------|--------------|
| What would be the correct clef if the melody is in F Major scale. | | | |
|  | | | |
| A. Bass Clef | B. Percussion Clef | C. Treble Clef | D. Alto Clef |

- A. A
- B. B
- C. C
- D. D
- E. None of these is correct

Q12. Answer the following Question.

[+1]

[-0]

Which Arpeggio is written here



| | | | |
|------------|------------|------------|------------|
| A. B Major | B. B Minor | C. G Major | D. G Minor |
|------------|------------|------------|------------|


- A. A
- B. B
- C. C
- D. D
- E. None of these is correct

Q13. Answer the following Question.

[+1]

[-0]

This is a melody and it is in _____ motion



| |
|-------------------------------|
| A. Contrary Motion |
| B. Similar Motion Ascending |
| C. Contrary Descending Motion |
| D. Similar Descending Motion |


- A. A
- B. B
- C. C
- D. D
- E. None of these is correct

Q14.

[+1]

[-0]

State the Chord Progression as per given C Major scale on 1st 3rd 5th degrees



| |
|--------------------------------|
| A. C Major E Minor and G Major |
| B. C Minor E Major and G Minor |
| C. C Major E Major and G Minor |
| D. C Minor E Minor and G Major |

- A. A
- B. B
- C. C
- D. D
- E. None of these is correct

Q15. Answer the following Question.

[+1]

[-0]

The Dynamics *ff* means.

| | | | |
|--------|---------------|-------------|---------------|
| A Loud | B Medium Loud | C Very Loud | D Normal Loud |
|--------|---------------|-------------|---------------|

- A. A
- B. B
- C. C
- D. D
- E. None of these is correct

Q16. Answer the following Question.

[+1]

[-0]

| | | | |
|---|--------------------|-----------|----------------|
| Name the longest note in this piece of music. | | | |
| | | | |
| A. Crotchet | B. Dotted Crotchet | C. Quaver | D. Semi Quaver |

- A. A
- B. B
- C. C
- D. D
- E. None of these is correct

Q17. Answer the following Question

[+1]

[-0]

| | | | |
|---|-------|-------|-------|
| | | | |
| What is the name of the pitch of the last note of the 2 nd bar in this music | | | |
| A - F | B - E | C - D | D - G |

- A. A
- B. B
- C. C
- D. D
- E. None of these is correct

Q18.

[+1]

[-0]

| | | | |
|----------------------------|------------|-------------|-------------|
| Arpeggio is of which scale | | | |
| | | | |
| A. Ab Major | B. F Major | C. Cb Major | D. Gb Major |

- A. A
- B. B
- C. C
- D. D
- E. None of these is correct

Q19. Answer the following Question.

[+1]

[-0]


| | | | |
|--|-----------------|------------|--------------|
| Name the degree of the pitch of the 1st note of the the treble clef. | | | |
| | | | |
| A. Tonic | B. Leading note | C. Mediant | D. Sub Tonic |

- A. A
- B. B
- C. C
- D. D
- E. None of these is correct

Q20. Answer the following Question

[+1]
[-0]

What is the name of an articulation over the crotchet head?




| | | | |
|-----------|----------|-----------------|----------|
| A Marcato | B Tenuto | C Staccatissimo | D Accent |
|-----------|----------|-----------------|----------|

- A. A
- B. B
- C. C
- D. D
- E. None of these is correct

Q21. Answer the following Question.

[+1]
[-0]

Choose Appropriate Time Signature




| | | | |
|-----------------|-----------------|-----------------|-----------------|
| A $\frac{4}{4}$ | B $\frac{6}{8}$ | C $\frac{9}{8}$ | D $\frac{3}{4}$ |
|-----------------|-----------------|-----------------|-----------------|

- A. A
- B. B
- C. C
- D. D
- E. None of these is correct

Q22. Answer the following Question.

[+1]
[-0]

Which is the longest note value in this music.




| | | | |
|------------|----------|---------------|-----------------|
| A Crotchet | B Quaver | C Semi Quaver | D Dotted Quaver |
|------------|----------|---------------|-----------------|

- A. A
- B. B
- C. C
- D. D
- E. None of these is correct

Q23. Answer the following Question

[+1]
[-0]

Count and tell the number semi quaver rests.




| | | | |
|-------|-------|---------|--------|
| A One | B Two | C Three | D None |
|-------|-------|---------|--------|

- A. A
- B. B
- C. C
- D. D
- E. None of these is correct

Q24. Answer the following Question

[+1]
[-0]

This Pattern of notes is called



| | | | |
|--------------------|-------------|----------------|----------------|
| A. Crochet Quavers | B. Sequence | C. Note Values | D. Syncopation |
|--------------------|-------------|----------------|----------------|

- A. A
B. B
C. C
D. D
E. None of these is correct

Q25. Answer the following Question.

[+1]
[-0]

Choose the correct Note Value in place of rests in 3rd bar

A. dotted Crotchet B. Minim C. Dotted Quaver D. Dotted Minim

- A. A
B. B
C. C
D. D
E. None of these is correct

Q26. Answer the following Question.

[+1]
[-0]

Choose the correct no of crotchet rest counts in the given music.

A. 1 B. 2 C. 3 D. 4

- A. A
B. B
C. C
D. D
E. None of these is correct

Q27. Answer the following Question.

[+1]
[-0]

Name the dotted note with the maximum value in the given music

A musical score snippet in treble clef with a key signature of one sharp (F#). The melody consists of several measures containing eighth, quarter, and dotted notes. A bracket above the staff highlights a specific dotted note.

| | | | |
|--------------------|-------------|-----------|----------------|
| A. Dotted Crotchet | B. Crotchet | C. Quaver | D. Semi Quaver |
|--------------------|-------------|-----------|----------------|

- A. A
B. B
C. C
D. D
E. None of these is correct

Q28.

[+1]
[-0]

| | | | |
|-----------------------------|-----------------------|-----------|--------------|
| The Melody is in _____ Time | | | |
| | | | |
| A. Simple Duple | B. Compound Quadruple | C. Common | D. Irregular |

- A. A
- B. B
- C. C
- D. D
- E. None of these is correct

Q29. Answer the following Question.

[+1]
[-0]

| | | | |
|--|----|----|----|
| Add Appropriate rest to complete this bar. | | | |
| | | | |
| A. | B. | C. | D. |

- A. A
- B. B
- C. C
- D. D
- E. None of these is correct

Q30. Answer the following Question.

[+1]
[-0]

| | | | |
|-----------------------------------|----------------|-------------------|-------------------|
| What is the meaning of Allargando | | | |
| A. Broadening | B. Little Fast | C. Getting softer | D. Fast then Slow |

- A. A
- B. B
- C. C
- D. D
- E. None of these is correct

Q31. Answer the following Question.

[+1]
[-0]

| | | | |
|-----------------|------------|----------|---------|
| What is DOLCE? | | | |
| A. Sweet & Soft | B. Dynamic | C. Depth | D. Deep |

- A. A
- B. B
- C. C
- D. D
- E. None of these is correct

Q32. Answer the following Question.

[+1]
[-0]

| | | | |
|--------------------------------|-------------|-----------|-------------|
| Tell how this melody is played | | | |
| | | | |
| A. Legato | B. Staccato | C. Tenuto | D. Staccato |

- A. A
- B. B
- C. C
- D. D
- E. None of these is correct

Q33. Answer the following Question.

[+1]
[-0]

| | | | |
|----------------|-------------|---------------|--------------|
| Name this rest | | | |
| A. Minim | B. Crotchet | C. Whole Note | D. Half Note |

- A. A
- B. B
- C. C
- D. D
- E. None of these is correct

Q34. Answer the following Question.

[+1]
[-0]

| | | | |
|----------------------------|----------|------------------|----------------|
| Name the dynamic <i>ff</i> | | | |
| A. Fortissimo | B. Forte | C. fortississimo | D. mezzo-forte |

- A. A
- B. B
- C. C
- D. D
- E. None of these is correct

Q35. Answer the following Question.

[+1]
[-0]


| | | | |
|---|------------------|-------------------|---------------------|
| Which scale is constructed with T-S-T-T-T-T-S | | | |
| A. Natural Minor | B. Melodic Minor | C. Harmonic Minor | D. Minor Pentatonic |

- A. A
- B. B
- C. C
- D. D
- E. None of these is correct

Q36. Answer the following Question.

[+1]
[-0]

Name this Part of the kit




| | | | |
|----------------|---------------|-----------------|---------------|
| A Crash | B Ride | C HI Hat | D Bass |
|----------------|---------------|-----------------|---------------|

- A. A
- B. B
- C. C
- D. D
- E. None of these is correct

Q37. Answer the following Question

[+1]
[-0]



Name this part of the guitar

| | | | |
|--------------------|---------------|---------------|---------------|
| A Sound Box | B Body | C Fret | D Neck |
|--------------------|---------------|---------------|---------------|

- A. A
- B. B
- C. C
- D. D
- E. None of these is correct

Q38. Answer the following Question.

[+1]
[-0]

| | | | |
|--|-------|------|------|
| On the E String of the guitar which note will you have on the 9 th fret | | | |
| A . C | B. C# | C. D | D. B |

- A. A
- B. B
- C. C
- D. D
- E. None of these is correct

Q39. Answer the following Question.

[+1]
[-0]

| | | | |
|--|------|------|------|
| Name of the Lowest string (1 st) of a 4 string Bass Guitar | | | |
| A. G | B. D | C. A | D. E |

- A. A
- B. B
- C. C
- D. D
- E. None of these is correct

Q40. Answer the following Question.

[+1]
[-0]

| | | | |
|---|----------------------|------------------------|----------------------|
| A Note that functions as ornamentation for the note that follows it. | | | |
| A. Passing note | B. Grace Note | C. Sliding note | D. Extra Note |

- A. A
- B. B
- C. C
- D. D
- E. None of these is correct

Q41. Answer the following Question.

[+1]
[-0]

| | |
|--|--|
| As per the size which arrangement is from the biggest to the smallest | |
| A - Violin – Viola – Cello - Double Bass | |
| B – Viola – Cello – Violin – Double Bass | |
| C – Violin – Cello – Viola – Double Bass | |
| D – Double Bass – Cello – Viola – Violin | |

- A. A
- B. B
- C. C
- D. D
- E. None of these is correct

Q42. Answer the following Question.

[+1]
[-0]

| | | | |
|---|-------------|-------------|-------------|
| Black Keys from One C to the Next C on the Keyboard. | | | |
| A. 5 | B. 6 | C. 3 | D. 2 |

- A. A
- B. B
- C. C
- D. D
- E. None of these is correct

Q43. Answer the following Question.

[+1]
[-0]

| | | | |
|------------------------------|----------------|----------------|-----------------|
| Cello uses which clef | | | |
| A. Treble | B. Bass | C. Alto | D. Tenor |

- A. A
- B. B
- C. C
- D. D
- E. None of these is correct

Q44. Answer the following Question.

[+1]
[-0]

| | | | |
|---|------------------|-------------------|----------------|
| Which instrument is part of brass family | | | |
| A. Piano | B. Guitar | C. Trumpet | D. Bass |

- A. A
- B. B
- C. C
- D. D
- E. None of these is correct

Q45. Answer the following Question.

[+1]
[-0]

| | | | |
|---------------------------------------|-------------------|-----------------|--------------------|
| Timpani belongs to this family | | | |
| A. Percussion | B. Strings | C. Brass | D. Woodwind |

- A. A
- B. B
- C. C
- D. D
- E. None of these is correct

Q46. Answer the following Question.

[+1]
[-0]

| | | | |
|---|----------------|-------------------|-------------------------|
| A High female voice with very high range is called | | | |
| A. Contralto | B. Alto | C. Soprano | D. Mezzo Soprano |

- A. A
- B. B
- C. C
- D. D
- E. None of these is correct

Q47. Answer the following Question.

[+1]
[-0]

| | | | |
|--|---------------------|---------------------|-------------------|
| A Directive given to a musician to perform the said passage of music firmly with proper discipline and complete resolution. | | | |
| A. Order | B. Directive | C. Judgement | D. Fermata |

- A. A
- B. B
- C. C
- D. D
- E. None of these is correct

Q48. Answer the following Question.

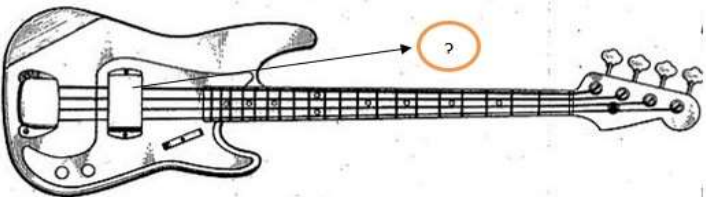
[+1]
[-0]

| | | | |
|---|-----------------------|-------------------------------|------------------------|
| A Note introduced between two successive chord tones in order to produce a melodic transition. | | | |
| A. Grace Note | B. Blues Chord | C. 7th Note | D. Passing Note |

- A. A
- B. B
- C. C
- D. D
- E. None of these is correct

Q49. Answer the following Question.

[+1]
[-0]



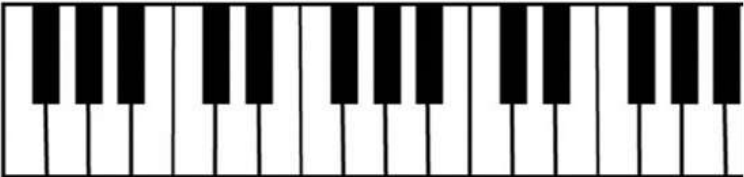
Which part does the Question mark represent here.

| | | | |
|------------|-----------|--------------|----------|
| A. Pick Up | B. Bridge | C. Pic Guard | D. Input |
|------------|-----------|--------------|----------|

- A. A
- B. B
- C. C
- D. D
- E. None of these is correct

Q50. Answer the following Question.

[+1]
[-0]



All The White Keys are called as

| | | | |
|--------------------|------------------|-------------------|---------------------------------------|
| A. Only Sharp Note | B. Natural Notes | C. Only Flat Note | D. Both Sharps and Flats/ Accidentals |
|--------------------|------------------|-------------------|---------------------------------------|

- A. A
- B. B
- C. C
- D. D
- E. None of these is correct

IFWMuO – 2022 Answer - Class 6 to 12

| | | | | | | | | | | | | | | | | | | | |
|----|---|----|---|----|---|----|---|----|---|----|---|----|---|----|---|----|---|----|---|
| 1 | A | 2 | B | 3 | A | 4 | C | 5 | D | 6 | B | 7 | A | 8 | D | 9 | A | 10 | A |
| 11 | C | 12 | C | 13 | B | 14 | A | 15 | C | 16 | B | 17 | D | 18 | A | 19 | C | 20 | B |
| 21 | C | 22 | D | 23 | A | 24 | B | 25 | A | 26 | A | 27 | A | 28 | B | 29 | B | 30 | A |
| 31 | A | 32 | B | 33 | C | 34 | A | 35 | B | 36 | B | 37 | B | 38 | B | 39 | A | 40 | B |
| 41 | D | 42 | A | 43 | B | 44 | C | 45 | A | 46 | C | 47 | D | 48 | D | 49 | A | 50 | B |



**INTERNATIONAL
OLYMPIAD FOUNDATION
(IOF)**

**Question paper available
for all subject**

