



SAMPLE PAPER

International Olympiad Foundation



EXCELLENCE IN EDUCATION

International Olympiad Foundation

14+

OLYMPIADS

MCQ

FORMAT

0

NEGATIVE MARKS

OLYMPIAD

Cyber Olympiad

International Olympiad Foundation (IOF) · www.iof.education

CLASS / GRADE

Class 1

SUBJECT

IFCO

DURATION

60 Min

MAX MARKS

35

GENERAL INSTRUCTIONS

- All questions are Multiple Choice Questions (MCQs) with options A, B, C, D, E
- Each correct answer carries 1 mark. No negative marking for wrong answers.
- Rough work should be done separately. Do not write on question paper.

PAPER HIGHLIGHTS

- **Multiple Choice Questions (MCQ)**
Five options per question (A, B, C, D, E). Select the single most appropriate answer.
- **No Negative Marking**
1 mark per correct answer. Zero deductions — attempt every question.
- **Conducted by IOF**
International Olympiad Foundation — fostering excellence among students across India.

SUBJECTS

- Cyber English Entrepreneurship Mathematics Commerce Economics GK & Current Affairs Science Western Music
Sanskrit Indian Music Hindi Reasoning & Aptitude Spell Talent

ALL IOF OLYMPIAD PROGRAMMES

IFCO International Foundation Cyber Olympiad	IFEO International Foundation English Olympiad	IFEnO International Foundation Entrepreneurship Olympiad	IFMO International Foundation Mathematics Olympiad	ICS Institute of Company Secretaries of India Commerce Olympiad	IFEcO International Foundation Economics Olympiad	IFGCO International Foundation General Knowledge & Current Affairs Olympiad
IFSO International Foundation Science Olympiad	IFWMuO International Foundation Western Music Olympiad	IFSaO International Foundation Sanskrit Olympiad	IFIMuO International Foundation Indian Music Olympiad	IFHO International Foundation Hindi Olympiad	IFRAO International Foundation Reasoning & Aptitude Olympiad	IFSTO International Foundation Spell Talent Olympiad


Q1. In a certain code, AF is written as 61, GC is written as 37, then how EH will be written in the same code ?:

[+1]
[-0]

- A. 87
- B. 58
- C. 85
- D. 96
- E. None of the option is correct

Q2. Which among the following objects is at the second position from the right if they are arranged in ascending order of their name?

[+1]
[-0]



- A. Grape
- B. Apple
- C. Pineapple
- D. Banana
- E. None of the option is correct

Q3. Choose the correct option.

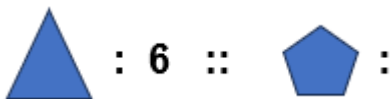
[+1]
[-0]

Chef is related to Restaurant in the same way as Druggist is related to

- A. Medicine
- B. Pharmacy
- C. Store
- D. Chemist
- E. None of the option is correct

Q4. Complete the second pair in the same way as the first pair.

[+1]
[-0]



- A. 5
- B. 8
- C. 10
- D. 12
- E. None of the option is correct

Q5. Choose the odd one out .

[+1]
[-0]

Neigh , Roar , Hiss , Grunt , Thump

- A. Neigh
- B. Roar
- C. Hiss
- D. Grunt
- E. Thump

Q6. If Today is Tuesday which day was 2 days before yesterday .

[+1]
[-0]

- A. Sunday
- B. Saturday
- C. Wednesday
- D. Tuesday
- E. None of the option is correct

Q7. Choose the odd one out from the animals given below:

[+1]
[-0]



- A. Monkey
- B. Rabbit
- C. Elephant
- D. Lion
- E. None of the option is correct

Q8. Choose the correct option to continue the series.

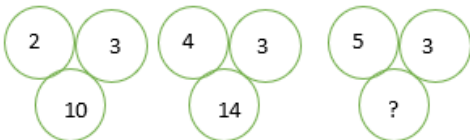
[+1]
[-0]

A, D, G, J, __, ?

- A. M
- B. N
- C. L
- D. K
- E. None of the option is correct

Q9. What is the missing number in the pattern ?

[+1]
[-0]



- A. 24
- B. 28
- C. 30
- D. 16
- E. None of the option is correct

Q10. Choose the correct option to continue the series :

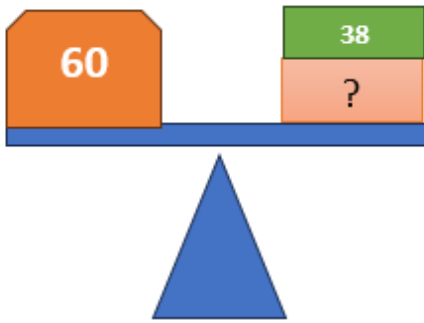
[+1]
[-0]

A2Z C4X E6V ____

- A. J8S
- B. G8T
- C. G8S
- D. G7S
- E. None of The Above

Q11. Choose the correct option to balance the scale

[+1]
[-0]



- A. 26
- B. 22
- C. 30
- D. 26
- E. None of the option is correct

Q12. Choose the option which is incorrect .

[+1]
[-0]

$13+5$	$20-2$	$13+0$	$13-0$	$10+10$	$20-0$	$2+7$	$9-2$
1	2	3	4				

- A. 2
- B. 4
- C. 1
- D. 3
- E. None of the option is correct

Q13. How many legs does two spider have?

[+1]
[-0]

- A. 8
- B. 12
- C. 16
- D. 18
- E. None of the option is correct

Q14. How many more butterflies are required, if we form 4 groups of 4 butterflies each using the given butterflies?

[+1]
[-0]



- A. 4
- B. 2
- C. 1
- D. 3
- E. None of the option is correct

Q15. Sonia has Rs. 350. She buys 1 Apple, 1 Pineapple, 1 Mango and a Cake from the market. How much money is left with her ?

[+1]
[-0]

				
Apple	Pineapple	Donuts	Cake	Mango
Rs 10	Rs. 25	Rs. 20	Rs 200	Rs. 15

- A. Rs 200
- B. Rs 150
- C. Rs 100
- D. Rs 50
- E. None of the option is correct

Q16. What do you use to type your name on a computer?

[+1]
[-0]

- A. Mouse
- B. Keyboard
- C. Joystick
- D. Printer
- E. None of the option is correct

Q17. For what purpose, Shortcut key combination Ctrl + S is used in MS Paint ?

[+1]
[-0]

- A. It helps you to take a printout of a page.
- B. It helps in moving up and down on a page.
- C. It helps you to delete a document file.
- D. It helps you to Save the text/image.
- E. None of the option is correct

Q18. Which one of the following is used as output device ?

[+1]
[-0]

			
1	2	3	4

- A. 2
- B. 3
- C. 4
- D. 1
- E. None of the option is correct

Q19. Which of the following helps us see what we are doing on the computer.

[+1]
[-0]

- A. CPU
- B. Keyboard
- C. Mouse
- D. Monitor
- E. None of the option is correct

Q20. When typing what does the Enter key do ?

[+1]
[-0]

- A. Makes a space
- B. Deletes a letter
- C. Starts a new line
- D. Moves the cursor left
- E. None of these

Q21. What do you use in MS Paint, when you draw a square and want to color it red ?

[+1]
[-0]

- A. Eraser
- B. Line tool
- C. Fill tool
- D. Text tool
- E. None of the option is correct

Q22. In the given picture, identify the device and its type.

[+1]
[-0]



- A. Scanner, Input Device
- B. Scanner, Output Device
- C. Printer, Input Device
- D. Scanner, Processing Device
- E. None of the option is correct

Q23. Which of the following icon allows users to pick a color in the MS paint document?

[+1]
[-0]



- A. 3
- B. 2
- C. 1
- D. 4
- E. None of the option is correct

Q24. Identify the use of image which is present at the bottom of MS Word document.

[+1]
[-0]



- A. To decrease the size of the font.
- B. To increase the size of the font.
- C. To zoom in or zoom out the document.
- D. To increase or decrease volume.
- E. None of the option is correct.

Q25. Which of these is not a safe practice online ?

[+1]
[-0]

- A. Using antivirus software.
- B. Keeping your password secret.
- C. Talking to strangers and sharing your home address online.
- D. Logging out after using a public computer.
- E. None of the option is correct

Q26. Which company owns WhatsApp?

[+1]
[-0]

- A. Apple
- B. Google
- C. Meta
- D. Microsoft
- E. None of the option is correct

Q27. How do you open a program such as Microsoft Word without any icons on the desktop?

[+1]
[-0]

- A. Right-click to display all icons.
- B. Restart the computer.
- C. It is not possible to open a program if no icons are on the desktop.
- D. Click the start button and select the program icon from the menu.
- E. None of the option is correct

Q28. How to close a window on the desktop?

[+1]
[-0]

- A. Go to the "File" and then select "Close."
- B. Press the "Ctrl" key on the keyboard.
- C. Use the mouse to press the button with the _ in it at the top right corner of the screen.
- D. Use the mouse to press the button with the "X" button at the top right corner of the screen.
- E. None of the option is correct

Q29. What is the function of the input device shown in the picture?

[+1]
[-0]



- A. To write the Text
- B. To Listen Music
- C. To Move the Cursor or point
- D. All the Above
- E. None of the option is correct

Q30. Which key helps you to type CAPITAL letters ?

[+1]
[-0]

- A. Shift Key
- B. Ctrl Key
- C. Alt Key
- D. Num Lock
- E. None of the option is correct

Q31. Which of the following is Microsoft Software?

[+1]
[-0]



- A. 2
- B. 4
- C. 1
- D. 3
- E. None of the option is correct

Q32. Identify the Logo .

[+1]
[-0]



- A. MS Team
- B. Dropbox
- C. Google Photo
- D. MS office
- E. None of the option is correct

Q33. Name online platform which students use to see and listen to music and videos .

[+1]
[-0]

- A. GMAIL
- B. YouTube
- C. OneDrive
- D. MS Office
- E. None of the option is correct

Q34. Identify the peripheral device shown in the picture .

[+1]
[-0]



- A. Scanner
- B. Digitizer
- C. Bar Code Reader
- D. Biometric Scanner
- E. None of the option is correct

Q35. Ravi has edited a painting in MS Paint which was saved as Ravi.jpg and now he wants to save this painting with Ravi2.jpg. What he should do.

[+1]
[-0]

- A. File → Save
- B. File → Save As
- C. File → Copy
- D. File → Rename
- E. None of the option is correct



CLASS / GRADE
Class 1

SUBJECT
IFCO

TOTAL QUESTIONS
35

MAX MARKS
35

ANSWER SHEET — 35 QUESTIONS

Q01-Q07	ANSWER	Q08-Q14	ANSWER	Q15-Q21	ANSWER	Q22-Q28	ANSWER	Q29-Q35	ANSWER
Q01	C	Q08	A	Q15	C	Q22	A	Q29	C
Q02	A	Q09	D	Q16	B	Q23	B	Q30	A
Q03	B	Q10	B	Q17	D	Q24	C	Q31	B
Q04	C	Q11	B	Q18	A	Q25	C	Q32	C
Q05	E	Q12	B	Q19	D	Q26	C	Q33	B
Q06	B	Q13	C	Q20	C	Q27	D	Q34	C
Q07	D	Q14	D	Q21	C	Q28	D	Q35	B

ALL IOF OLYMPIAD PROGRAMMES

<p>IFCO International Foundation Cyber Olympiad</p>	<p>IFEO International Foundation English Olympiad</p>	<p>IFEnO International Foundation Entrepreneurship Olympiad</p>	<p>IFMO International Foundation Mathematics Olympiad</p>	<p>ISI Institute of Company Secretaries of India Commerce Olympiad</p>	<p>IFEcO International Foundation Economics Olympiad</p>	<p>IFGCO International Foundation General Knowledge & Current Affairs Olympiad</p>
<p>IFSO International Foundation Science Olympiad</p>	<p>IFWMuO International Foundation Western Music Olympiad</p>	<p>IFSaO International Foundation Sanskrit Olympiad</p>	<p>IFIMuO International Foundation Indian Music Olympiad</p>	<p>IFHO International Foundation Hindi Olympiad</p>	<p>IFRAO International Foundation Reasoning & Aptitude Olympiad</p>	<p>IFSTO International Foundation Spell Talent Olympiad</p>